





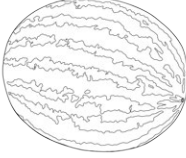




# Compare the Fruit

I can calculate the total combined mass and difference of several items.



						
blueberry 5g	strawberry 10g	apricot 30g	apple 80g	peach 100g	banana 150g	melon 2kg

1) Use the correct symbol (<, > or =) to compare these items:

6 strawberries and 1 banana		2 peaches and 3 blueberries
8 blueberries, 2 apricots and 1 apple		2 apricots, 1 peach, 4 blueberries
1 melon		5 peaches, 2 bananas, 4 apricots

2) Calculate the difference in mass between:

a)	1 apple and 6 strawberries	2 apricots and 5 blueberries	
b)	2 bananas and 3 apricots	4 strawberries and 2 peaches	
c)	3 apricots and 1 peach	3 apples and 6 blueberries	



3. What fruit items would make these statements correct?

a) 2 apples, 4 strawberries and ? = 380g

---

b) 2 bananas, 6 blueberries and ? = 450g

---

c) 1 melon, 3 peaches and ? = 2kg 500g

---



# Compare the Fruit Answers

I can calculate the total combined mass and difference of several items.



- 1) Use the correct symbol (<, > or =) to compare these items.

6 strawberries and 1 banana	>	2 peaches and 3 blueberries
8 blueberries, 2 apricots and 1 apple	=	2 apricots, 1 peach, 4 blueberries
1 melon	<	5 peaches, 2 bananas, 4 apricots

- 2) Calculate the difference in mass between:

a)

1 apple and 6 strawberries	2 apricots and 5 blueberries	55g
----------------------------	------------------------------	-----

b)

2 bananas and 3 apricots	4 strawberries and 2 peaches	150g
--------------------------	------------------------------	------

c)

3 apricots and 1 peach	3 apples and 6 blueberries	80g
------------------------	----------------------------	-----

- 3) What fruit items would make these statements correct?

- a) 2 apples, 4 strawberries and ? = 380g

*Fruit whose mass total 180g*

- b) 2 bananas, 6 blueberries and ? = 450g

*Fruit whose mass total 120g*

- c) 1 melon, 3 peaches and ? = 2kg 500g

*Fruit whose mass total 200g*